

LITTLE ANGELS PUBLIC SCHOOL, BARPALI

Session 2022-23

Class VIII

SUMMER VACATION HOLIDAY HOMEWORK

INSTRUCTIONS

1. Use separate one line copy for each subject.
2. Name, class, section and subject should be written on every copy .
3. Holiday Homework must be done in a very neat and presentable manner.
4. Assessment will be done for handwriting, presentation, neatness, indexing and completion of all the given questions.
5. Dates for submission of Holiday Homework will be 16th & 17th June.
6. Take a printout of the given Holiday Homework before doing the Homework.
7. Submit the holiday homework along with the printout.

ENGLISH

1 **Literature** Poem 'The Last Bargain' By heart it and write it nicely.

2. Sup Reader -

- a. Read the Ch ' Children at Work' and select one character you like the most and write a few suitable adjectives / phrases that describe the character .You may also draw the character.
- b. Read the Ch The 'Selfish Giant' Find out at least (20) words and write its meaning.

3 Grammar

Do as Directed

a) Write the correct form of given verbs (1 to 10)

1. The garden ____ (have) many flowers regularly.
2. The snow ____ (cover) the grass in last winter
3. My friend never ____ (forget) to wish me.
4. I ____ (wake) up at 8 O'clock when I was a child.
5. She ____ (go) to the gym every day.
6. Don't disturb me, I ____ (think)
7. By next year ,we ____ (study) in class IX.
8. When my mother ____ (cook), I ____ (play) cricket.
9. These days the cost of goods ____ (rise)
10. We ____ (prepare) for exams these days.

b) Change into present continuous

- 1 We play chess at home.
- 2 He makes tea well.
- 3 She will be reading a book.

c) Change into simple past

- 1 I am watching a movie .
- 2 The boy was flying a kite.
- 3 They are playing cricket in the field.

d) Change into simple future

1 I listened to her speech.

2 We will be asking him.

3 Seema writes a letter.

e) Change into future continuous

1 You can swim in the river.

2 I am talking to my friend.

3 He was making a project.

f) Change into past continuous

1. You visit your grandmother every Sunday.

2. They will be painting a picture.

3. She cooks dinner for us.

g) Identify the tense

1 We play chess at home.

2 He makes tea well.

3 She will be reading a book.

4 I watched a movie .

5 The boy was flying a kite.

6 They are playing cricket in the field.

7 I have listened to her speech.

8 We will ask him.

9 Seema writes a letter.

10 You can swim in the river.

11 I have been talking to my friend.

12 He had been making a project.

13 You visit your grandmother every Sunday.

14 They were painting a picture.

15 She had cooked dinner for us.

16 They had dinner last night.

17 She'll write the email after lunch.

18 I'll see you tomorrow.

19 You'll have been getting the answer by post.

20 I'll have driven you to your lesson at 4 pm.

h) From the given paragraph, Identify and classify the words according to their function...noun , pronoun , verb , adjective,adverb, preposition and conjunction.

Be like a flower. One must try to become like a flower: open, frank, equal, generous and kind.

So you know what it means ?

A flower is open to all that surrounds it: nature, light, the rays of the sun, the wind etc. It exerts a spontaneous influence on all that is around it. It radiates joy and beauty.

It is frank. It hides nothing of its beauty and lets its fragrance flow frankly out of itself. What is within and what is in its depths, it lets it come out so that everyone can see it.

It is equal: it has no preferences. Everyone can enjoy its beauty and its perfume without rivalry. It is equal and the same for everybody. There is no difference, or anything whatsoever. Then generous without reserve or restriction, it gives away the mysterious beauty and the very own perfume of Nature. It sacrifices itself entirely for our pleasure, even its life it sacrifices to express this beauty and the secret of the things gathered within itself.

And then, kindly: it has such a tenderness, it is so sweet, so close to us, so loving. Its presence fills us with joy. It is always cheerful and happy.

Happy is he who can exchange his qualities with the real qualities of the flowers. Try to cultivate in yourself their refined qualities

i) **List (50) verbs and write their V2 and V3 forms.**

4 Writing

a) **Make your own sentence-**

cancel. invite. prepare arrive. recite refuse reduce. solve. agree
improve. pay. drowsy frank. invent. electric curiosity. necessary. punctual
regularly. knowledge. bravery. honest. Advice. Comfortable
Respect. Ancestor. Confidence Occasion advantage. Mystery Grassy.
Apology. Fertility Choice. Proof. Destroy Grazing. Precious. Humble
Terrible. Attentive. studious Grief. Glory. Originate
Sympathy. Devotee. Postpone Inheritance. Delicious

b) **Rearrange the jumbled words .**

1. Honest all is a person liked who by is .
2. Bats to harmless most people are.
3. Main growth is population the problem
4. Role education an can important play
5. Better us hope a let future for
6. Their those ancestors were trees by planted
7. Doctor the son go to you have to.
8. Room you and keep clean must your neat .
9. He wise rich is but also not only
10. a child hand the young had holding to each woman on.
11. must we protect resources our natural.
12. upset why looking you are?
13. colors kites in of many flew the city different.
14. the behind were the bush thieves hiding.
15. can I the see on roof something.

c) **Writing**

Paragraph writing

1) Benefits of reading books, 2) The hero of my life , 3) My hobby

Formal letter writing

- 1) Write a letter to your principal to arrange an inter school cricket match .
- 2) You have some financial problem .Write a letter to your principal for a fee concession of 2 months.

3) Write a letter to the editor of a newspaper regarding the insufficient water supply in your locality.

Informal letter writing

- 1) Write a letter to your friend describing your experience of taking food in a Chinese restaurant.
- 2) Your friend Abhinav lives in Bangalore. An International Book Fair is going on in your city. Write a letter inviting him to come and stay with you and visit the Bookfair. You are Pulkit Nikita living at A – 405, Vijay Laxmi Apartments, Lajpat Nagar, Delhi.
- 3) After experiencing the scorching heat. The other day it rained heavily. It was a welcome relief after a long spell of dry weather. Write, in about 100-125 words, a letter to your friend, describing your experience of a rainy day

d) **Translation.**

Translate into English from pg 34 to 44 (follow the same translation books)

HINDI

पाठ - ३ शीर्षक बस की यात्रा

- १) पाठ का पहला अनुच्छेद पठन करते हुए। (इ,ई,उ,ऊ) के मात्रा वाला शब्द छाँटकर लिखिए।
- २) इसी पाठ के दूसरा एवं तीसरा अनुच्छेद पठन करते हुए कठिन शब्द लिखेगा एवं उसी कठिन शब्द का शब्दार्थ भी लिखेगा।
- ३) इस पाठ के पृष्ठ (नंबर १५) को पठन करते हुए संज्ञा, सर्वनाम, विशेषण, काल को छाँटकर लिखिएगा।

४) बस की यात्रा पाठ पठन करते हुए शब्दार्थ लिखिए एवं उसी शब्दों से वाक्य बनाइएगा।

*निर्देशानुसार उत्तर दीजिए

५) समास विग्रह करके समास का नाम लिखें

क) शाप ग्रस्त, ख) राजा-रंक, ग) दोपहर, घ) बेखटके

६) निम्नलिखित शब्दों से भाववाचक संज्ञा शब्द बनाइये।

क) इंसान, ख) अच्छा, ग) अहं, घ) विन्नम

७) निम्नलिखित वाक्यों के वचन बदलकर वाक्य दुबारा लिखिए।

क) ऐसी बस अपने आप चलती है।

ख) काँच बहुत कम बचे थे।

ग) हरे-भरे पैड़ थे जिस पर पक्षी बैठे थे।

घ) आगे या पीछे से कोई गाड़ी आती दिखती तो वह एकदम किनारे खड़ी हो जाती।

८) निम्नलिखित शब्दों के लिए तीन-तीन पर्यायवाची शब्द लिखिए।

क) वन, ख) पत्ता, ग) पेड़, घ) फल

९. निम्नलिखित मुहावरों का अपने वाक्यों में प्रयोग कीजिए।

क) चटनी बना देना-, ख) उलटे पाँव दौड़ना-, ग) भीगी बिल्ली बनना-, घ) चेहरे का रंग उड़ना-

१०) बसंत ऋतु में आने वाले त्योहारों के विषय में जानकारी एकत्र कीजिए और किसी एक त्योहार पर निबंध लिखिए।

रचना विभाग

११) औपचारिक पत्र

१) किसी समाचार-पत्र के संपादक को अपने शहर में बसों की दुर्दशा के विषय में पत्र लिखिए।

२) अपने मुहल्ले में नालियों के जमा होने से फैलने वाली बीमारियों से बचाव के लिए स्वास्थ्य अधिकारी को पत्र लिखिए।

३) अपने विद्यालय में पीने के पानी की समुचित व्यवस्था हेतु प्रधानाचार्य को प्रार्थना-पत्र लिखिए

१२) अनौपचारिक पत्र

१) आपका छोटा भाई परीक्षा में असफल हो गया है, उसे सांत्वना देते हुए पत्र लिखिए

२) आपके प्रिय मित्र का किसी से झगड़ा हो गया। आपको लगता है कि गलती आपके मित्र की ही थी।

अतः उसका मार्गदर्शन करते हुए पत्र लिखकर उसे उचित सलाह दीजिए

३) अपनी भूल के लिए क्षमा माँगते हुए अपने पिता जी को पत्र लिखिए।

१३) निम्नलिखित विषयों पर निबंध लिखिए।

१) व्यायाम और स्वास्थ्य, २) सादा जीवन उच्च विचार, ३) मेरे प्रिय अध्यापक

१४) पाठ-१. 'ध्वनि' (कविता) को याद कीजिएगा सुन्दर एवं साफ अक्षर में लिखिएगा चित्र के साथ।

ODIA

୧. ବୃକ୍ଷମହିମା ପଦ୍ୟ କୁ ମୁଖସ୍ଥ କରି ନିର୍ଭୁଲ୍ ଏବଂ ପରିଷ୍କାର ଭାବେ ଲେଖ।

୨. ମୋର ସ୍କୁଲ ପଢ଼ା ଗନ୍ୟ ପଠନ କରି ୩୦ ଟି କଠିନ ଶବ୍ଦ ବାଛି ଲେଖ।

୩. ମୋର ସ୍କୁଲ ପଢ଼ା ପ୍ରବନ୍ଧର ୩୧ ପୃଷ୍ଠାର ଶେଷ ଦୁଇଟି ଅନୁଚ୍ଛେଦ ରେ ଥିବା କ୍ରିୟା ପଦ, ବିଶେଷ୍ୟ ପଦ ଓ ବିଶେଷଣ ପଦ ଚିହ୍ନଟ କରି ଅଲଗା ଅଲଗା କରି ଲେଖ।

୪. ବର୍ଣ୍ଣବୋଧ ବହି ର ମୁକ୍ତାକ୍ଷର ଏବଂ ପଳା ବ୍ୟବହାର ହୋଇଥିବା ଶବ୍ଦକୁ ୨ ଥର ଲେଖାଏଁ ଲେଖ। (ଯେପରିକି କ୍+ମ = କ୍ଳ, ଡ୍+ନ = ଢ୍, ଆଦି ଅକ୍ଷର ଲାଗି ଶବ୍ଦ ହୋଇଥିବ।)

୫. ବିପରୀତ ଶବ୍ଦ ଲେଖ : ଦୂର, ଛାୟା, ଶତ୍ରୁ, ଅଗ, ଅପକାର, ବିଶୃଙ୍ଖଳା, ଆୟ, ପୁଣ୍ୟ, ସମ୍ପଦ, ଆଶା, ଇହ, ଦୁର୍ଜନ, ସକ୍ଷମ, ପୂର୍ବ, ପଡ଼ିବା, ସମ୍ପୂର୍ଣ୍ଣ ପୁରୁଣା, ନିରୁପାୟ

୬. ନିମ୍ନଲିଖିତ ଶବ୍ଦଗୁଡ଼ିକର ଦୁଇଟି ଲେଖାଏଁ ପ୍ରତିଶବ୍ଦ ଲେଖ।

ବୃକ୍ଷ, ରବି, ଜୀବନ, ଫୁଲ, ଘର, ନଦୀ, ମେଘ, ପୃଥିବୀ, ଜଳ, ନୌକା।

୭. ନିମ୍ନଲିଖିତ ଶବ୍ଦଗୁଡ଼ିକୁ ନେଇ ବାକ୍ୟ ଗଠନ କର।

ସହଜ, ପ୍ରାଥମିକ, ନିରାଶ, ଗବେଷଣା, ପ୍ରଖ୍ୟାତ, ନିଦାୟ, ପୁରୁଣା, ସମଗ୍ର, ଉପାୟ, ଅତିକ୍ରମ, ଅତ୍ୟନ୍ତ, ସମ୍ପୂର୍ଣ୍ଣ, ସକ୍ଷମ, ଏକତ୍ର, ଗ୍ରହଣ

୮. ଲିଖନ ବିଭାଗ

ଦରଖାସ୍ତ ଲିଖନ:

(କ) ଛୁଟି ମଞ୍ଜୁର କରିବା ନିମନ୍ତେ ପ୍ରଧାନ ଶିକ୍ଷକଙ୍କ ନିକଟକୁ ଦରଖାସ୍ତ ଲେଖ।

(ଖ) ତୁମ ଦରମା ଛାଡ଼ କରିବା ପାଇଁ ପ୍ରଧାନ ଶିକ୍ଷକଙ୍କ ପାଖକୁ ଦରଖାସ୍ତ ଲେଖ ।

(ଗ) ତୁମ ଗ୍ରାମର ପାନୀୟଜଳ ସମସ୍ୟା ଦୂର କରିବା ନିମନ୍ତେ ତୁମ ଅଂଚଳ ର ଗୋଷ୍ଠୀ ଉନ୍ନୟନ ଅଧିକାରୀ କି ନିକଟକୁ ବ୍ୟକ୍ତିଗତ ପତ୍ର ଲିଖନ ।

ବ୍ୟକ୍ତିଗତ ପତ୍ର ଲିଖନ

(ଘ) ଗଣତନ୍ତ୍ର ଦିବସ କିପରି ପାଳନ କଲ ବର୍ଣ୍ଣନା କୁରି ତୁମ ମାମୁଙ୍କ ନିକଟକୁ ପତ୍ର ଲେଖ ।

(ଙ) ନିଜ ଜନ୍ମଦିନ ଉତ୍ସବ ରେ ଯୋଗ ଦେବା ପାଇଁ ନିଜ ସାଙ୍ଗଙ୍କ ନିକଟକୁ ପତ୍ର ଲେଖ ।

(ଚ) ଗ୍ରୀଷ୍ମବର୍ଷା ବେଳେ ସ୍ବାସ୍ଥ୍ୟ ର ଉତ୍ତମ ଯତ୍ନ ନେବାକୁ ଉପଦେଶ ଦେଇ ନିଜ ସାନ ଭଉଣୀ ନିକଟକୁ ପତ୍ର ଲେଖ ।

ପ୍ରବନ୍ଧ ଲିଖନ :

(ଛ) ଗ୍ରୀଷ୍ମଋତୁ

(ଉପକ୍ରମ- ଗ୍ରୀଷ୍ମ ଋତୁର କାରଣ- ଗ୍ରୀଷ୍ମଋତୁ ର ପ୍ରକୃତି- ଅପକାରିତା- ଉପକାରିତା- ଶେଷ କଥା)

(ଜ) ବ୍ୟାୟାମ ର ଉପକାରିତା

(ଉପକ୍ରମ- ବ୍ୟାୟାମ ର ପ୍ରକାର- ଉପକାରିତା- ସତର୍କତା - ଶେଷ କଥା)

(ଝ) ତୁମ ଆଦର୍ଶ ବିଦ୍ୟାଳୟ

(ଉପକ୍ରମ - ଅବସ୍ଥିତି- ବିଦ୍ୟାଳୟ ଭବନ- ଛାତ୍ରଛାତ୍ରୀ- ଶିକ୍ଷକ ମଣ୍ଡଳୀ - ଶିକ୍ଷାଦାନ ଉପକରଣ - ଶେଷ କଥା)

(ଞ) ନିମ୍ନ ରେ ଦିଆଯାଇଥିବା କେତୋଟି ବାକ୍ୟ ର ପରବର୍ତ୍ତୀ ଅଂଶ କୁ ପୂରଣକରି ନିଜ ମନରୁ ୧୦୦ ଶବ୍ଦ ମଧ୍ୟରେ ଏକ ଶୀର୍ଷକ ଦେଇ ଗୋଟିଏ କାଳ୍ପନିକ କାହାଣୀ ଲେଖ :-

ଗୋଟିଏ ପରିବାରରେ ରାମ ଓ ରଘୁ ନାମକ ଦୁଇ ଭାଇ ଥିଲେ। ରାମ ମା' ବାପାଙ୍କ କଥା ମାନି ଚଳେ। ରଘୁ କାହାରି କଥା ଶୁଣେ ନାହିଁ। ଦିନେ ବାପା ଭଲ ପାଠ ପଢ଼ିବା ପାଇଁ ଦୁହଁଙ୍କୁ ।

MATH

1. Do as directed.

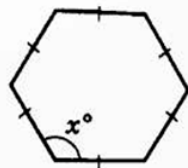
1. The rational number that does not have its reciprocal is _____
2. Is subtraction of rational numbers commutative? _____
3. $\frac{1}{5}$ lies to the left of 0 on the number line. Is this a true statement? _____
4. The additive inverse of $-\frac{7}{19}$ is _____
5. A rational number between -2 and 6 is _____
6. $\frac{1}{2} + \left[\frac{-1}{3} + \frac{2}{5} \right] =$ _____
7. The rational numbers which are their own reciprocals are _____
8. If $x = \frac{-2}{3}$ and $y = \frac{-3}{4}$, then the reciprocal of $(x + y)$ is _____
9. Can we divide $\frac{1}{2}$ by 0? _____
10. The reciprocal of $\left(\frac{1}{4} + \frac{1}{6} \right)$ is _____
11. How many rational numbers are there between -6 and -5? _____
12. The reciprocal of $\left(\frac{-2}{3} \times \frac{3}{4} \right)$ is _____
13. What number should be added to $-\frac{5}{4}$ to get 0? _____
14. $1 - \frac{3}{4} + \frac{7}{6} =$ _____
15. $\frac{9}{16} \times \frac{4}{12} + \frac{9}{16} \times \left(\frac{-3}{9} \right) =$ _____

Do as directed.

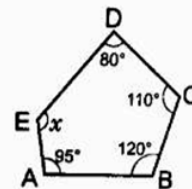
- Find $\frac{3}{7} + \left(\frac{-6}{11}\right) + \left(\frac{-8}{21}\right) + \frac{5}{22}$
- Find $\frac{-4}{5} \times \frac{3}{7} \times \frac{15}{16} \times \left(\frac{-14}{9}\right)$
- Find using distributive property: (i) $\left\{\frac{7}{5} \times \left(\frac{-3}{12}\right)\right\} + \left\{\frac{7}{5} \times \frac{5}{12}\right\}$ (ii) $\left\{\frac{9}{16} \times \frac{4}{12}\right\} + \left\{\frac{9}{16} \times \frac{-3}{9}\right\}$
- Find $\frac{2}{5} \times \frac{-3}{7} - \frac{1}{14} - \frac{3}{7} \times \frac{3}{5}$
- Simplify: $\frac{-4}{5} \times \frac{3}{7} \times \frac{15}{16} \times \left(\frac{-14}{9}\right)$
- Multiply $\frac{6}{13}$ by the reciprocal of $\frac{-7}{16}$.
- What number should be added to $\frac{7}{12}$ to get $\frac{4}{15}$?
- What number should be subtracted from $-\frac{3}{5}$ to get -2 ?
- Is $\frac{8}{9}$ the multiplicative reciprocal of $-1\frac{1}{8}$? Why or why not?
- Is 0.3 the multiplicative reciprocal of $3\frac{1}{3}$? Why or why not?

Geometry

- Tick the correct alternative :
 - Number of diagonals, a regular hexagon has
a) 4 b) 5 c) 8 d) 9
 - A regular polygon has 24 sides. The measure of its interior angles is
a) 15° b) 30° c) 150° d) 165°
 - Two adjacent angles of a parallelogram are in the ratio 2 : 3. Then these angles are
a) $72^\circ, 108^\circ$ b) $60^\circ, 120^\circ$ c) $40^\circ, 140^\circ$ d) $65^\circ, 115^\circ$
 - In a quadrilateral TYPE, if $TY = TE$ and $YP = PE$, then it is
a) parallelogram b) kite c) rectangle d) square
- Three angles of a quadrilateral are equal and the fourth angle measures 135° . Find the measure of equal angles.
- The angles of a quadrilateral are in the ratio 1:2:3:4. Find each angle.
- The sum of the opposite angles of a parallelogram is 150° . Find the angles of the parallelogram.
- In a parallelogram PQRS
 - $\angle P = (2x + 10)^\circ$, $\angle R = (3x - 20)^\circ$. Find the value of x .
 - $\angle R = (5y)^\circ$, $\angle S = (2x + 19)^\circ$. Find the value of y .
- Two adjacent sides of a parallelogram have lengths 5 cm and 4 cm. Find the perimeter of the parallelogram.
- Find the length of the diagonal of a rectangle whose sides are 4 cm and 3 cm.
- The sides of a rectangle are in the ratio 4:5. Find its sides if the perimeter is 90 cm.
- Find the value of x in each of the following cases.



(i)



(ii)

- The measures of two adjacent angles of a quadrilateral 122° and 38° . The other two angles are equal. Find them.
- One angle of a quadrilateral is 108° . The other three angles are in the ratio 3 : 4 : 5. Find these angles.
- Find the number of sides of a regular polygon whose exterior angles measures 40° .
- Find the number of sides of a regular polygon whose each angle measures 144° .
- In a parallelogram RICE, $\angle R = (3x - 1)^\circ$ and $\angle C = (50 - x)^\circ$. Find x and all the angles of the parallelogram.
- The sum of two opposite angles of a parallelogram is 140° . Find all the angles of the parallelogram.

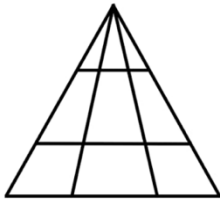
2. Mental Maths



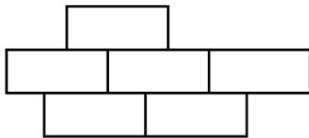
NOVEMBER 2021

SUN	MON	TUE	WED	THU	FRI	SAT
	1	2	3	4	5	6
7	8	9	10	11	12	13
14	15	16	17	18	19	20
21	22	23	24	25	26	27
28	29	30				

- How many minutes have passed since 4 o'clock ?
- What is the date of the first Sunday ?
- What day is the 1st ?
- What day is the 18th ?
- How many Sundays are there this month ?
- Which one is the last day of the month ?
- A chair has 4 legs. How many legs do 6 chairs have?
- 1 dollar = _____ cents
- If you cut a pizza into 10 pieces and eat 4, how many pieces will be left ?



- How many triangles are in the given picture ?
- Fill in the missing operation (, , \times or) to make this correct :
 $5 \square 6 \square 3 \square 2 = 8$
- How many months in $\frac{3}{4}$ of a year?
- Which of these numbers is prime ?
 33, 45, 57, 69, 53, 49



- The shape consists of 6 congruent rectangles. If a single rectangle has a perimeter of 222, what is the perimeter of the shape ?

$\square + \bigcirc = 53 \quad \bigcirc =$
 $\triangle + \triangle = 36 \quad \triangle =$
 $\triangle + \bigcirc = 45 \quad \square =$

- Solve the puzzle.
-
- Write and remember tables from 12 to 35.
- Write and remember square tables from 1 to 50.
 - $1^2 = 1 \times 1 = 1$
 - $2^2 = 2 \times 2 = 4$
 - $3^2 = 3 \times 3 = 9$
- Write and remember cubes tables from 1 to 30.
 - $1^3 = 1 \times 1 \times 1 = 1$
 - $2^3 = 2 \times 2 \times 2 = 8$
 - $3^3 = 3 \times 3 \times 3 = 27$
- Learn and write 2 times ' Points to be remember' from Ch.1 and Ch.9.
- Write and Remember the formulas of Area of Polygons.
 - Area of a Triangle • Area of a Quadrilateral • Area of a Parallelogram • Area of a Rectangle • Area of a Square • Area of a Rhombus • Area of a Trapezium

11. Make a colourful chart on 'Properties of Quadrilaterals' in your Holiday Homework Copy.

12. ACTIVITY

- a) Cut and paste shapes of different types of quadrilaterals using scrap paper. Write the name and definitions in your H.H.W copy.
- b) To Show that the area of a parallelogram is the product of its base and height (using colour paper)

SCIENCE

- 1 Learn and write the practice questions of
Ch-1 Crop Production and Management
Ch-4 Materials Metals and Non Metals
2. Draw a flowchart to describe about the agricultural practices followed by farmers.
3. Draw and label the following agricultural implements- plough , hoe ,sickle and khurpi. Write the work of the given implements.
- 4-Make a list of 20 elements with their symbols and their atomic number .
- 5- Activity :- Write 10 different science related news which may be (interesting/alarming/discovery related etc

SST

- 1.Learn and write the practice questions of
History-Ch 2 From Trade to Territory
Civics- Ch 1 The Constitution
Geography Ch 1 Resources
- 2 Civics : Write neatly the Preamble of India.
- 3 Geography : Make a flow chart on different *Resources* mentioning its categories and sub-categories along with examples.
- 4 Activity
Draw the map of India on a 1/2 size of the chart paper . Colour the different states & union territories and indicate their names.

GK

- 1.Who was the first woman prime minister of India?
- 2.Which is the largest state in India ?
- 3.Who is the first citizen of India?
- 4.Who has composed the National Song of India ?
5. Name the longest river on the Earth?
- 6.Which continent has not a single volcano?
- 7.What is the height of the three wooden stumps in cricket?
- 8.Which type of lens is used in the camera?
- 9.Which is India's highest sport award?
- 10.Who was the first woman Lok Sabha speaker of India?
- 11 National Youth Day is celebrated on which date?
- 12.How many bones are there in the human face?
- 13.Which animal never drinks water in its entire life?
- 14 What is the largest and the deepest ocean in the world?
- 15 Which Indian state has the least literacy rate?
- 16 Which is the world's largest flower?
- 17 Where do permanently deleted files go In computers?
- 18 What Is the resolution of the human eye?
- 19 Which is the newest country in the world ?
- 20 Name the first country to have a President.
- 21 Which country has the most number of billionaires?
- 22 Folk painting 'Madhu Bani' is famous in which state?
- 23 Which bank is the Banker of the Banks?

- 24 Which classical dance is named after the village it was born from ?
- 25 Who composed the famous song "Sare Jahan Se Achha"?
- 26 My Music, My Life' is the autobiography of which person?
- 27 Which is the oldest mountain range in India?
- 28 What is the imaginary line that divides India into almost two parts known as?
- 29 Which place receives the highest rainfall in the world?
- 30 Who is known as "The Saint of Gutters"?
- 31 Who won the Nobel Prize for Literature in 1913?
- 32 Which newspapers was founded by Mahatma Gandhi in South Africa in 1903??
- 33 Which space agency sends 104 satellites in a single mission in 2017?
- 34 What do you call a type of shape that has five sides?
- 35 Which is the most widely spoken language in the world?
- 36 Who is the founder of Microsoft?
- 37 During Which Year Did World War I Begin?
- 38 Which african Ntion is famous for chocolate?
- 39 Which Language is Used by the Computer to Process Data?
- 40 Which is the hardest substance available on earth?
- 41 What Does the "SIM" in the SIM Card Stand for?
- 42 What is the largest joint in the human Body?
- 43 Who is the first woman to go to space?
- 44 Which is the world's largest country?
- 45 What is the name of the first woman IPS of India?
- 46 Which country is known as the largest producer of gold?
- 47 Which colour symbolizes peace?
- 48 Name the primary colours.
- 49 How many years are there in one Millenium?
- 50 Which is the National Aquatic Animal of India?

COMPUTER

Short objective questions

1. Microsoft Access is a _____.
2. Write type of Microsoft access database objects?
3. Press _____ to quit MS Access.
4. What is the maximum length a text field can be?
5. In Ms Access which object is used to stored data?
6. Ms stands for?
7. Write the name of two type of views in Access?
8. Write the name of few data types in Ms Access?
9. W hat is the extension of Access 2013 database?
10. What a field that has a unique value for every record and cannot be left blank is called ?

Short Activity base questions

3. Consider the table Voter and answer the questions that follow.

Vno	Vname	Salary	Area	Gender
1	Jayesh	15000	North Delhi	M
2	Jayati	16000	South Delhi	F
3	Nishant	5000	West Delhi	M
4	Ronit	10000	East Delhi	M

- a) Which field should be made the Primary key for this table?
- b) Suggest suitable data types for the fields.
- c) Which view would you use to set field data types and properties?
- d) Which field property will you set to ensure that values more than zero are entered in the field Salary?
- e) Which field properties would you use to ensure that it is mandatory for the user to enter Voter Name?
- f) The Default property for the Field area has been set to "West Delhi". What does this imply?