

Class- VI (Holiday Homework)
3rd Week

Day – 1

Subject- English

1. Read part - I of Unit - 2 Chapter - (The Unlikely Best Friends) and write 10 difficult words with their meanings.

2. Make sentences using the following words.

i) Convey ii) threw iii) kind iv) enter v) money

3. Write the rhyming words. (See Page - 16)

(i) limb - _____

(ii) word - _____

(iii) beak - _____

(iv) joke - _____

Subject- Odia

1. ଛୁମ୍ବେ ଛୁମ୍ବ ବାପାଙ୍କ ସହିତ ଗାଆଁ ହାଟକୁ ଯାଇ ପନିପରିବା କିଣିବାର ଅନୁଭୂତି ବିଷୟରେ ଗୋଟିଏ ଅନୁଛେଦ ଲେଖ ।

2. ନିମ୍ନଲିଖିତ ଶବ୍ଦଗୁଡ଼ିକୁ ବ୍ୟବହାର କରି ବାକ୍ୟ ଗଠନ କର ।

i) ପ୍ରାର୍ଥନା ii) ଆଶୀର୍ବାଦ iii) ଆଶ୍ଚର୍ଯ୍ୟ vi) ଆଦେଶ ।

Subject- Maths



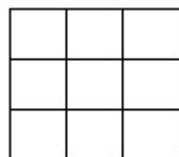
1. which type of angle is this ?

2. Write table 23 and 17.

3. Write all the factor of 81 in factor tree method.

4. Write the name of 5 types of fruits which are circle in shapes.

5. Find how many square in the given figure.



Subject- Science

1. What is the importance of body temperature? Make a mind map of the temperature of cold-blooded animals (5 of your favourite animals).

2. Draw or paste 3 types of thermometer and write its working principles below the following thermometer.

Subject- English

1. Learn and write the verb forms of the following verbs.

V1	V2	V3
pay	paid	paid
read	read	read
run	ran	run
sell	sold	sold
build	built	built
buy	bought	bought
catch	caught	caught
feel	felt	felt
tell	told	told
fall	fell	fallen
forget	forgot	forgotten
freeze	froze	frozen
hide	hid	hidden
shake	shook	shaken
steal	stole	stolen
swim	swam	swum
sing	sang	sung
tear	tore	torn
grow	grew	grown
dance	danced	danced

2. Write a Paragraph on “ My Best Friend“.

Subject- Odia

1. ସପ୍ତାହର ସାତବାର ଓ ଛଅ ଋତୁର ନାମ ଓଡ଼ିଆରେ ଲେଖ ।

- i) ଫୁଲ ii) ଶତ୍ରୁ iii) ଗଢ଼ିବା iv) ନୀର v) ନେତ୍ର -ଏମାନଙ୍କର ଦୁଇଟି ଲେଖାଏଁ ପ୍ରତିଶବ୍ଦ ଲେଖ ।

Subject- Maths

1		
	3	
		2

1. solve given sudoku.
2. $\frac{3}{4}$

--	--	--	--

 colour the figure according to fraction.
3. What is 5 less than 450.
4. Write the divisibility test of 3
5. $1000 \times 1000 =$ _____.

Subject- Science

1. Which magnets are useful in our daily life and how? Write it.
2. What is the magnetic field of earth and how is it working against the solar wind to protect our earth?

Day – 3

Subject- English

1. **Writing** : Write an application to the principal requesting her to arrange extra classes for Maths.
2. **Translation** : Translate into English.

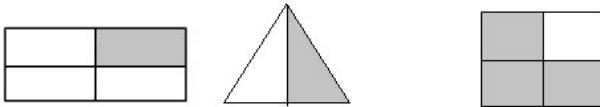
- i) ସେ କଲେଜକୁ ଗଲା ।
- ii) ମୁଁ ଏକ ବହି ପଢ଼ିଲି ।
- iii) ସେ ଗୀତ ଗାଇଲା ।
- iv) ଆମେ ଖେଳ ଖେଳୁ ।
- v) ସେ ଖାଦ୍ୟ ଖାଇଲା ।

Subject- Odia

1. ଷ୍ଟ, ଷ୍ଟ, ଷ୍ଟ ଓ ଷ୍ଟ ଯୁକ୍ତାକ୍ଷରକୁ ନେଇ ପାଞ୍ଚଗୋଟି ଲେଖାଏଁ ଶବ୍ଦ ଲେଖ ।
2. "ମୁରୁକି ମୁରୁକି" ପରି ଆଉ ପାଞ୍ଚଗୋଟି ଯୁକ୍ତ ଶବ୍ଦ ଲେଖ ।

Subject- Maths

1. Make chat of prime number.
2. Complete the patterns 3, 6, 9, 12, _____, _____, _____
3. Find the lowest form of $\frac{20}{40}$ is _____.
4. Look the figure and write the fraction.



5. Draw a triangle which $AB = 5$ cm $BC = AC$.

Subject- Science

1. What are the measuring techniques of ancient times and modern times? Make a table of the measuring tools of the ancient and modern time.
2. Give a picture of strong and permanent magnet and write its uses.

Day – 4

Subject- English

1. Read part - II of Unit - 2 Chapter - (The Unlikely Best Friends) and write 10 difficult words with their meanings.

2. Make sentences using the following

i) Realise ii) interesting iii) faithful iv) disappeared v) enjoy

3. Fill in the blanks by choosing the correct option. (See Page - 14)

(i) The Raven _____ that he croaked. (remembered/forgot)

(ii) The Raven opened its beak to _____. (eat/sing)

(iii) The _____ fell down. (food/Raven)

(iv) The Fox _____ at the Raven. (laughed/looked)

(v) It is not _____ to be too proud of oneself. (wise/unwise)

(vi) The Raven learnt a _____. (lesson/teaching)

Subject- Hindi

१. पाठ के सभी कठिन शब्द और संयुक्त अक्षरों को रेखांकित कीजिए -

२. नीचे दिए गए शब्दों को वाक्य में प्रयोग कीजिए-

i) खिलाड़ी

ii) तरक्की

iii) जादूगर

iv) शर्मिदा

v) जीत

vi) कोशिश

vii) मुकाबला

viii) चिंता

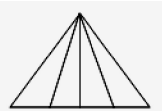
ix) परिवार

x) गुस्सा

Subject- Maths

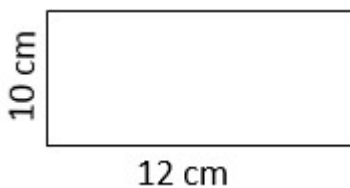
1. From your kitchen find Geometrical shapes like circle, square rectangle cone, cylinder.

2. Find how many triangles in the given figure.



3. $\frac{1}{4} + \frac{1}{6} + \frac{1}{10} + \frac{1}{11} =$ _____.

4. Find the area and perimeter of the given rectangle whose length 12 cm breadth is 10 cm.



5. Multiply the sum of 124 and 26 by their difference.

Subject- SST

Draw a rough map of your locality or your village, including your home, school and a few other important landmarks (follow your SST book ch-1 pg no 10)

Day – 5

Subject- English

1. Grammar : Fill in the blanks with suitable pronouns:

- i) ___ am going to the market.
- ii) John is my friend. ___ is very kind.
- iii) These are my books. Give them to ___.
- iv) My brother and I went to the park. ___ played cricket there.
- v) That is Rita. ___ is my sister.

2. Rearrange the jumbled words.

- i) sky / the / in / birds / flying / are
- ii) car / red / a / has / he
- iii) morning / every / jog / I
- iv) cake / the / delicious / looks

3. Write a Paragraph on “ My School”.

Subject- Hindi

१. नीचे दिए गए शब्दों में योजक चिह्न का प्रयोग कीजिए-

जैसे - हार और जीत

हार - जीत

- i) बच्चे व बूढ़े
- ii) छोटा या बड़ा
- iii) अमीर और गरीब
- iv) उत्तर और दक्षिण
- v) गुरु और शिष्य

इसके अलावा १० शब्द अपने मन से सोचकर लिखिए -

२. ५० -१०० तक गिनती अंकों तथा अक्षरों में लिखिए -

Subject- Maths

1. What is angle.
2. Explain the difference between a line and ray.
3. Draw an angle of 60° using a protractor.
4. Find the mistake “An Angle of 200° is a cute”.
5. Writ table 7, 17, 23.

Subject- SST

Read ch-4 and define the following keyword:

- i) Era
- ii) Geologists
- iii) Anthropologists
- iv) Auspicious
- v) Historian

Day – 6

Subject- English

1. Writing : Write an application to the principal requesting for a week due to viral fever.
2. Translation : Translate into English.
 - i) ସେ ଗଡକାଲି ଭୁବନେଶ୍ୱର ଗଲା ।
 - ii) ତୁମେ ତାଙ୍କୁ ଦେଖିଲ?
 - iii) ମୁଁ ଏକ ଚିଠି ଲେଖିଲି ।
 - iv) ସେ ମୋତେ ସାହାଯ୍ୟ କଲା ।
 - v) ସେମାନେ ଗଛ ଲାଗାଇଲେ ।
3. Tense Chart : - Follow the examples given in Week - 1 and write sentences of all tenses using the verb 'sing'.

Subject- Hindi

१. पाठ -२ गोल के लेखक मेजर ध्यानचंद का जीवन परिचय लिखिए -
२. ध्यानचंद की कौन - सी बात आपको ज्यादा प्रभावित की और क्यों ? अपने विचार ५० से ६० शब्दों में लिखिए-
३. खेल सामग्री की माँंग करते हुए प्रधानाचार्य को पत्र लिखिए-

Subject- Maths

1. Draw a clock.
 - a) 11.15 am
 - b) 12:30 am
2. 3 right angles = _____ degree
3. 2 straight angles = _____ degree
4. $\frac{1}{2}$ of 180° is _____ angle.

Subject- SST

Case base study

(Read the paragraph and answer these questions)

Ayan's family was going on a road trip. His father gave him a road map to help navigate their journey. Ayan noticed that the map had symbols, lines, and colors. His father explained that maps are used to locate places and plan routes. He showed him the four cardinal directions (North, South, East, and West) and how a compass rose on the map helps determine directions. Ayan also saw a scale on the map and learned that it helps calculate actual distances. His younger sister asked why maps use different colors, and their father explained that blue represents water, green represents forests, and brown represents mountains.

1. What are the four cardinal directions on a map ?
2. What is the purpose of a compass on a map?
3. How does a map scale help in measuring distances?

Subject - G.K

1. Make a table of the state and its capital of India.
2. Write the flowers which are blossoming at day and night (each 5).
3. Write the current affairs of this week.

Subject – Computer

Project 3: Uses of Computer

Activity: Write where computers are used in your computer copy.

Examples: School, Hospital, Bank, Railway Station, Home

Summer Special Activity

Make a First - Aid Box with all required essentials.