

Class- VIII (Holiday Homework)
2nd Week

Day – 1

Subject- English

1. Recite the poem (A Concrete Example) first stanza and write the meanings of hard words .

Make sentences using the following words.

Neighbour, crazy, rockery, beyond, sundial device.

2. Complete the following summary with exact words from the poem. One example has been done for you.

The poem describes Mrs. Jones, the speaker's next-door neighbour, who has a unique garden filled with 1. _____. Her garden includes a peculiar 2. _____, a pond, and a rockery, along with an unusual 3. _____ that she finds harming. Mrs. Jones plants tiny, 4. _____ plants between the stones, which the speaker thinks must be so small that they are planted with a 5. _____. One day, Mrs. Jones invites the speaker to see her garden, and they discuss a 6. _____ that Mrs. Jones treasures. When the speaker asks where the 7. _____ flower is,

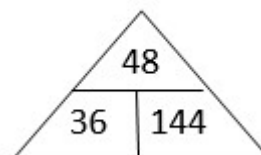
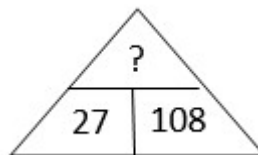
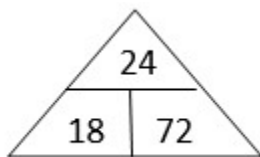
Mrs. Jones says that the speaker has been 8. _____ on it all along.

Subject- Hindi

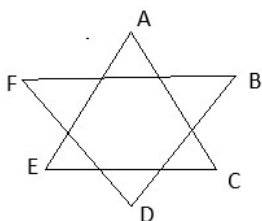
- १) स्वदेश कविता के पृष्ठ -२ को याद कीजिए ।
- २) पृष्ठ -२ के सभी पंक्ति को साफ और सुंदर अक्षरों में लिखिए ।
- ३) इन पृष्ठों में से कठिन शब्द छांट कर शब्दार्थ लिखिए ।
- ४) नि.लि. शब्दों को लेकर एक एक सार्थक वाक्य बनाईए --
माता - पिता, दुनिया, तलवार, मिट्टी, ज्ञानी।
- ५) कविता में से पांच प्रश्न छांट कर इन सभी का उत्तर भी लिखिए ।
-- श्रीमद्भागवत गीता द्वादश अध्याय का प्रथम श्लोक को याद कीजिए (जो आपके डायरी में है)

Subject- Maths

1. Practice 1^3 to 10^3 two times.
2. Write multiplication table 13, 17, 19 two times.
3. Find the missing number.



4.



proof $\angle A + \angle B + \angle C + \angle D + \angle E + \angle F = 360^\circ$

5. Draw a, cuboid, cube, cone, and a cylinder and identify its edge, face, and vertex.

Subject- Science

Why do you think animal cells like cheek cells do not need a cell wall, whereas plant cells do? How does this difference relate to their functions and environment?

Day – 2

Subject- English

1. Write V1,V2, V3 of the given verbs.

Be, ask , stand, talk, cry, think,push pull, beat agree, lose, break, do, borrow,, lend, spend, knock, hide ,kill,save

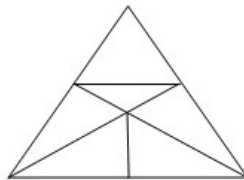
2. Write a Paragraph on “ Your National Flag.”.

Subject- Hindi

- १) विराम चिह्न की परिभाषा लिखिए ।
- २) विराम चिह्न की सभी भेदों का नाम लिखिए ।
- ३) इन विराम चिह्न का नाम लिखिए -- (?) (!) (।)
- ४) चिह्न लिखिए - अल्प विराम (), अर्ध विराम () उद्धरण चिह्न (), ।
श्रीमद्भागवत गीता द्वादश अध्याय का द्वितीय श्लोक को याद कीजिए

Subject- Maths

1. Square table 21^2 to 30^2 two times.
2. Simplify: $\left(\frac{3}{11} \times \frac{5}{6}\right) - \left(\frac{9}{72} \times \frac{4}{3}\right) + \left(\frac{5}{13} \times \frac{6}{15}\right)$
3. If ' - ' stand for ' ÷ ', ' + ' stands for ' × ' ' ÷ ' stands for ' - ' and ' × ' stands for ' + ' when find the value of $[10 + 10 - 10 \times 10 \div 10]$
4. Draw any 4 types of quadrilaterals, and identify its opposite sides and angles.
5. How many triangles are their in the figure,



Subject- Science

Prepare a chart of microorganisms in A4 size paper.

Day – 3

Subject- English

1. Writing : Write an application to the Principal asking for a hostel seat.
2. Translation : Translate into English.
 - i) ବାପା ବାହାରକୁ ଯାଇଛନ୍ତି ।
 - ii) ମୀରା ତାର ଗୃହକାର୍ଯ୍ୟ କରୁଅଛି ।
 - iii) ମୈତ୍ରୁ ତୁମକୁ ପୂର୍ବରୁ ଏ କଥା କହିଅଛି ।
 - iv) ଚେମାହନ ବଜାରକୁ ଯାଇଅଛି ।
 - v) ଚେମାହନ ଦିଲ୍ଲୀ ଯାଇଛନ୍ତି ।

Subject- Hindi

- १ - स्वदेश कविता को पठन करके समझिए और आप के विचार में कविता के आगे और क्या हो सकता है लिखिए ।
२. आपके क्षेत्र में गर्मी के महीनो में बिजली की समस्या से उत्पन्न हो रही कठिनाइयों का वर्णन करते हुए महाप्रबंधक को एक पत्र लिखिए ।
-- श्रीमद्भागवत गीता द्वादश अध्याय का तृतीय श्लोक को याद कीजिए

Subject- Maths

1. Practice cube table 1^3 to 10^3 two times.
2. Evaluate $\left[\left(\frac{1}{4}\right)^{-1} + \left(\frac{1}{5}\right)^{-1} + \left(\frac{1}{3}\right)^3 \right] \times 10^1$
3. How to find
 - a) Perimeter of a rectangle
 - b) Perimeter of a square
 - c) Perimeter of a rhombus
 - d) Perimeter of a parallelogram
4. From your kitchen find geometrical shape of material like circle, square, rectangle, oval, cone, cylinder etc.
5. Find how many triangles are their the given figure.



Subject- Science

Explain what is frictional force and give examples . Where you observe friction in your everyday life. (Follow page number 77 of your book)

Day – 4

Subject- English

1. Recite the stanzas 2 and 3 of the poem **A Concrete Example**. Write difficult words with their meaning. Make sentences using the following
Delicate, unless, next, door, pin
2. Complete the table by making new words in Column 1 Using the hints given in Column 2 .Replace the first letter of the given word to create new words. One example has been done for you.

Column 1	
Nice	
1.	Cut into small pieces
2.	Grain that we cook
3.	Plural of mouse
4.	Bad habit

Subject- Odia

ବୃକ୍ଷ ମହିମା

ପଦ - ଗୋପାଳ ମେଲେ ଦାମୋଦର..... ସାଧକ୍ତି ପ୍ରାଣୀ ଉପକାର ।

(ଏହି ପଦଗୁଡ଼ିକୁ ଉଚ୍ଚ ସ୍ଵରରେ ଆବୃତ୍ତି କର ଓ ନିମ୍ନ ଲିଖିତ ପ୍ରଶ୍ନଗୁଡ଼ିକର ଉତ୍ତର ଲେଖ ।)

୧. ସଂକ୍ଷେପରେ ଉତ୍ତର ଦିଅ ।

କ) ଗୋପାଳ ପୁଏ କାହିଁକି ଦୁଃଖ ପାଇଲେ ?

ଖ) କୃଷ୍ଣଙ୍କ ମିତ୍ର ମାନଙ୍କ ନାମ ଲେଖ ।

୨. ଗ୍ରୀଷ୍ମ, ବର୍ଷା . ଶୀତ- ଏଇ ତିନି ଋତୁର ଓଡ଼ିଆ ମାସ ଗୁଡ଼ିକର ନାମ ଲେଖ ।

(ଉଦାହରଣ : - ଗ୍ରୀଷ୍ମ ଋତୁ - ବୈଶାଖ ଓ ଜ୍ୟେଷ୍ଠ)

୩. ଘରକୁ ଅତିଥି ଆସିଲେ ତୁମେ କ'ଣ କରିବ ?

Subject- Maths

1. Practice multiplication table 13, 17, 19 three times.

2. How to find

a) Profit

b) Loss

c) Profit %

d) Loss %

e) SP (if loss)

f) SP (if profit)

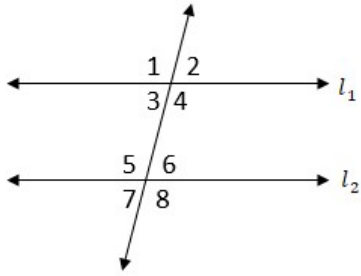
g) CP (if loss)

h) CP (if profit)

3. Fill in the blanks in the given box.

SP (Rs)	CP (H)	Profit	Loss	Profit %	Loss %
500	400	?		?	
?	1000		250		?
500		75		?	

4. Find all angle if ' l_1 ' || ' l_2 ' and ' t ' is transversal if $\angle 1 = 100^\circ$



5. Draw

- A pair of parallel lines.
- Intersecting lines
- Linear pair
- Vertically opposite Angles.

Subject- SST

Define the following key words

- Resource
- Hydro electricity
- Ecosystem Services
- Soil Erosion
- Industrialization
- Technology

Day – 5

Subject- English

■ Grammar:

- Complete the sentences using the perfect tense.
 - Asha _____ never _____ (see) the Red Fort.
 - They _____ (not/see) that movie yet.
 - _____ you not _____ (take) your bath yet?
 - She _____ (work) here since January.
 - He _____ (lose) his keys.
- A. Rearrange the jumbled words to make a meaningful sentence.
 - has / movie / already / they / seen / that
 - just / has / he / work / from / come / back
 - house / they / cleaned / have / the
 - a / written / she / letter / has

Subject- Odia

ବୃକ୍ଷ ମହିମା

ପଦ - ସୁଜନ ଘରେ ଯେହ୍ନେ ଯାଇ..... ବୃକ୍ଷର ତଳେ ନରହରି ।

(ଏହି ପଦଗୁଡ଼ିକୁ ଉଚ୍ଚ ସ୍ଵରରେ ଆବୃତ୍ତି କର ଓ ନିମ୍ନ ଲିଖିତ ପ୍ରଶ୍ନଗୁଡ଼ିକର ଉତ୍ତର ଲେଖ ।)

୧. ସଂକ୍ଷେପରେ ଉତ୍ତର ଦିଅ ।

କ) ଅତିଥି କେଉଁଠାରୁ ନିରାଶ ହୁଅନ୍ତି ନାହିଁ ?

ଖ) ଗଛ ଆମକୁ କ'ଣ ସବୁ ଦିଏ ବୋଲି କବି କବିତାରେ କହିଛନ୍ତି ?

୨. ସ୍ଵ , ଷ୍ଠ , ଙ୍ଵ, ଜ୍ଞ- ଏହି ଯୁକ୍ତ ଅକ୍ଷର ଗୁଡ଼ିକୁ ନେଇ ଦୁଇଟି ଲେଖାଏଁ ଶବ୍ଦ ଗଠନ କର ।

୩. ବୃକ୍ଷ ମହିମାର କବି ତୁମେ ହୋଇଥିଲେ ଏହାର ଶେଷ ପଦ କ'ଣ ଲେଖିଥାନ୍ତ ?

Subject- Maths

1. Practice square table 11^2 to 30^2 two times.

2. Follow the given pattern and write next 3 steps.

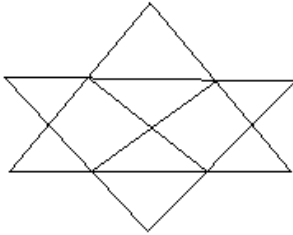
$$1 = 1^3$$

$$1 + 3 = 4 = 2^2$$

$$1 + 3 + 5 = 9 = 3^2$$

3. Write angle sum property of triangle using paper cutting and pasting method.

4. Count the number of parallelogram in the given figure.



5. Solve puzzle.

Multiplication crossword puzzles

	4	x	4	=	
			x		
				x	6
			=		
x					
6	x	6	=		
					x
					x

Subject- SST

Map Work

Locate the following places on political map – based on mineral resource

- i) Bailadila
- ii) Kudremukh
- iii) Digboi
- iv) Chandrapur
- v) Jamshedpur
- vi) Bokaro

Day – 6

Subject- English

1. Writing : Write a letter to your friend inviting him to come to your village to enjoy the summer vacation.

2. Translation : Translate into English.

- i) ମୁଁ ବୁଲିଥିବା ଠିକଣା ଯାଉଅଛି ।
- ii) ସେ ତାର ଗୃହକାର୍ଯ୍ୟ କରିଅଛି ।
- iii) ଏଇ ଝରକାଟି କିଏ ଭାଙ୍ଗିଛି ।
- iv) କିଏ ପବନକୁ କିଏ ଦେଖୁଛି ।
- v) ମୁଁ ମୋର ବାଇକ ଚାକି ହେଉଛି ଦେଖୁଛି ।

3. Tense chart

Make a tense chart of present perfect tense by using the verb 'take'.

Subject- Odia

ମୋର ସ୍କୁଲ ପଢ଼ା

ଅନୁଛେଦ- “ମୁଁ ରୁଆଁ ସ୍କୁଲରେ ବାରିପଦାରେ ପଢ଼ୁଥିଲେ ।”

(ଏହି ଅନୁଛେଦଗୁଡ଼ିକୁ ଉଚ୍ଚମାନରେ ପଢ଼ି ଓ ବୁଝ । ତା'ପରେ ନିମ୍ନ ଲିଖିତ ପ୍ରଶ୍ନଗୁଡ଼ିକର ଉତ୍ତର ଲେଖ ।)

୧. ମୋର ସ୍କୁଲ ପଢ଼ା ଗଦ୍ୟର ଲେଖକଙ୍କ ପରିଚୟ ପ୍ରଦାନ କର ।

୨. ସଂକ୍ଷେପରେ ଉତ୍ତର ଦିଅ ।

କ) ସୂଚନାରେ ଦିଆଯାଇଥିବା କଠିନ ଶବ୍ଦ ଓ ଅର୍ଥ ଲେଖ ।

ଖ) ଅସଙ୍ଗତ, ସହପାଠୀ - ଶବ୍ଦ ଗୁଡ଼ିକୁ ବ୍ୟବହାର କରି ବାକ୍ୟ ଗଠନ କର ।

ଗ) ୯୨, ୧୨, ୫ - ଏଗୁଡ଼ିକୁ ଅକ୍ଷରରେ ଲେଖ ।

Subject- Maths

1. Multiplication table 13, 14, 15 practice two times.

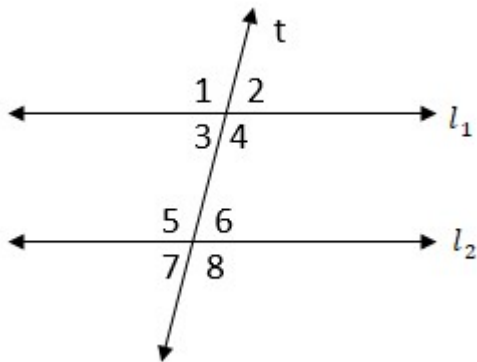
2. Simplify: $20 \div 5 \{3 - 5 - 2 + 5 - 2\}$

3. Draw given quadrilateral

- a) Convex quadrilateral

- b) Concave quadrilateral
- c) Rhombus quadrilateral
- d) Kite quadrilateral

4. Write pairs of angle in the given figure.



- a) Corresponding angle.
- b) Co – interior angle.
- c) Alternate interior angle.
- d) Alternate exterior angle.

Subject- SST

Write a short notes about responsible & judicious use of resource ?

Subject - G.K

Write about Major upcoming project of ISRO

Subject - Computer

Project 2

Write 10 cyber safety rules in separate one line copy.

Example: Never share password online

Summer Special Activity

Make a friendship bracelet with colourful threads, beads and other decorative items.