

Class- VIII (Holiday Homework)

4th Week

Day – 1

Subject- English

1. Read the Chapter (A Tale Valour) page no - 50 to 53 and write 10 difficult words with their meanings.

2. Make sentences using the following words.

i) Valour ii) infiltrators iii) annex iv) combat v) resolute vi) unparalleled,

3. Fill in the blanks correctly with the words given in the brackets.(See Page no -64)

- i) The teacher's (i) _____ is always helpful, and she continues to (ii) _____ students on their career choices. (advice/advise)
- ii) The musician believes that daily (i) _____ helps a lot, so she is always ready to (ii) _____ her harmonium lessons. (practice/practise)
- iii) The scientist uses a strange (i) _____ for experiments and plans to (ii) _____ new methods for his analysis. (device/devise)
- iv) The village (i) _____ met to discuss issues and decided to (ii) _____ the villagers on important matters.(council/counsel)

Subject- Hindi

1. दो गौरेया पाठ के पृष्ठ १४ एवं १५ दो बार पठन कीजिए ।
2. इनमें से पांच वाक्य साफ और सुंदर अक्षरों में लिखिए ।
3. इन पृष्ठों से कठिन शब्द छंट कर शब्दार्थ लिखिए।
4. जिन शब्दों में छोटा उ एवं बड़ा ऊ वाले मात्र है इन सभी शब्दों को दो बार लिखिए ।
5. प्रश्न -- पृष्ठ १४ और १५ को पढ़ कर इनमें से पांच प्रश्न बना कर उत्तर लिखिए ।
श्रीमद्भागवत गीता द्वादश अध्याय के सप्तम श्लोक को याद कीजिए और अपने अभिभावकों को सुनाईए ।

Subject- Maths

1. Practice multiplication table 12 to 16 two times.
2. Write 10 English alphabets (capital) and draw its symmetrical lines.
3. Write name of angles.



4. Collect height and weight of your family member and represent in double bargraph.

Subject- Science

1. Why is there no aquatic life in the Dead Sea? Try to find out if there are any other similar water bodies.
2. Why do barbers use a concave mirror when showing the back of your head, even though a plane mirror might seem enough? Do this activity in your home and give reason for it.

Subject- Science

What are the different phases of the moon? Explain in details.

Day – 3

Subject- English

1. **Writing** : Write a letter to your friend to inviting her/him to your elder brother's marriage ceremony.

2. **Translation** : Translate into English.

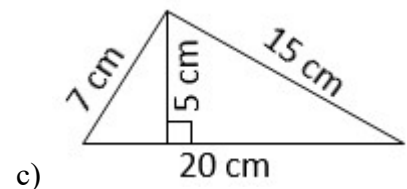
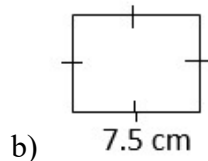
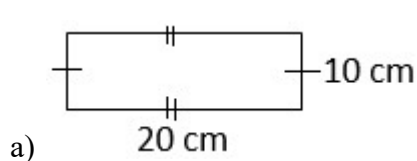
- ସେ ଚିଢ଼ି ଦେଖୁଥିଲା।
- ତୁମେ ଚିଠି ଲେଖୁଥିଲା।
- ଆମେ ଖେଳମାଠରେ ଦୌଡ଼ୁଥିଲୁ।
- ସେମାନେ ଗୀତ ଗାଉଥିଲେ।
- ମୁଁ ତାଙ୍କୁ ଅପେକ୍ଷା କରୁଥିଲି।

Subject- Hindi

- आप अचानक अस्वस्थ होने के कारण तिन दिन के चिकित्सावकाश की प्रार्थना करते हुए अपने पधान आचार्या को (principal@lapsbpl) पर एक ई-मेल कीजिए ।
- युद्ध के कारण अभी देश में तेल और गैस सिलेंडर की समस्या हो रही है। आपके विचार में इस समस्या का समाधान कैसे हो पाएगा सोच विचार कर एक अनुच्छेद लिखिए ।
श्रीमद्भागवत गीता द्वादश अध्याय के नवम श्लोक को याद कीजिए और अपने अभिभावकों को सुनाईए ।

Subject- Maths

- Square table 10^2 to 20^2 two times.
- Find perimeter and Area of given figure.



- Ram went to market. He brought Potato of 3 Kg, Tomato of 2 Kg, brinjal of 3 Kg. Cabbage of 4 Kg and Onion of 5 Kg. cost of Potato Rs $(3x - 5)$ per Kg, Tomato of Rs $(7x + 3)$ per Brinjal of Rs $(3x + 9)$ per Kg, $(4x - 9)$ per Kg of cabbage and Onion of Rs $(3x + 4x)$ per Kg.

Based on above answer the following question questions.

- Find how much Vegetable he buy?
- Find degree of given expression.
- Find total he can give for Onion and Potato.
- How much amount he spent in the market?

Subject- Science

The magnetic field protects Earth from harmful particles. What could be the possible effects on humans and other species if this protection were weakened?

Day – 4

Subject- English

1. Read the Chapter (A Tale of Valour) page no - 54 to 58 and write 10 difficult words with their meanings.

2. Make sentences using the following

- i) Testament ii) legacy iii) forged iv) conspicuous,

3. Fill in the blanks for the following sentences by choosing the correct verb given within brackets. (See Page - 65)

- i) The bouquet of flowers _____ (is/are) beautiful.
ii) Neither the teacher nor the students _____ (was/were) aware of the change in the schedule.
iii) Each of the participants _____ (has/have) submitted their projects on time.
iv) The data collected by the researchers _____ (shows/show) significant trends.
v) One of the players _____ (was/were) injured during the match.
vi) Either the children or their guardian _____ (has/have) to attend the meeting.
vii) A pair of shoes _____ (is/are) missing from the rack.
viii) Neither of the statements _____ (is/are) true.
ix) The members of the jury _____ (has delivered/have delivered) their verdict to the court.
x) Mathematics _____ (is/are) an interesting subject for many students.

Subject- Odia

ମୋର ସ୍କୁଲ ପଢ଼ା

୧. କ) ନିରବଚ୍ଛିନ୍ନ, ଅନିଚ୍ଛିନ୍ନ- ସୂଚନାରେ ଦିଆଯାଇଥିବା ଏହି ଶବ୍ଦଗୁଡ଼ିକର ଅର୍ଥ ଲେଖି ତାହାକୁ ବାକ୍ୟରେ ବ୍ୟବହାର କର ।

ଖ) ଛାତ୍ର + ଆବାସ = ଛାତ୍ରାବାସ ସେହିପରି କ'ଣ ହେବ - ସର୍ବାଙ୍ଗ, ସୌଧାବଳି, ସଂପୂର୍ଣ୍ଣ

ଗ) ପେଛା, ସମୂହ, ଗଣ, ବୃନ୍ଦ - ଶବ୍ଦ ପରେ ଏହି ପଦଗୁଡ଼ିକୁ ଯୋଡ଼ି ବହୁବଚନ ପଦରେ ଲେଖ

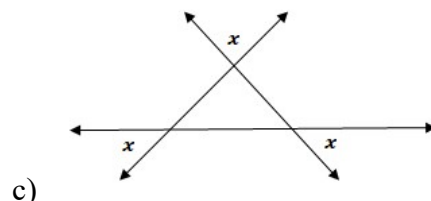
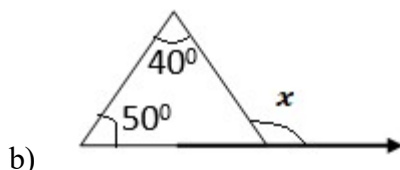
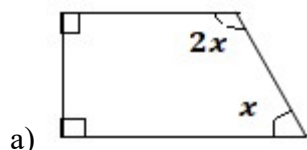
(ଯେପରି - ପେଛା - ବଉଳ ପେଛା)

Subject- Maths

1. Cube table 10^3 to 15^3 three times.

2. $A = 3x^4 + 5y^3 + 4xy - 10$ and $B = 10x^4 + 10y^3 - 9xy - 15$ find $(A + B) - (A - B)$

3. Find unknown angles in the given figure.



4. Ram's father is twice as old as Ram and Ram's grandfather is 20 years older than his father. If sum of age of all three is 100 years. What is the age of all?

Subject- SST

Mention any six dynasties of India with respective states on a political map?

Subject- English

Choose the correct adverbs from the option

- i) She completed the task _____.
a) efficient b) efficiently
- ii) He reacted _____ to the situation.
a) calm b) calmly
- iii) The students listened _____ to the teacher.
a) attentive b) attentively
- iv) She solved the problem _____.
a) easy b) easily
- v) The child behaved _____ in class.
a) bad b) badly

2. Rearrange the jumbled words.

- i) always / she / early / wakes / up
- ii) playing / are / football / they / now
- iii) has / he / homework / his / finished
- iv) to / market / went / yesterday / I / the
- v) very / is / this / interesting / book

3. Write a Paragraph on “Independence Day”.

Subject- Odia

ଦାଣ୍ଡୀ ଯାତ୍ରା

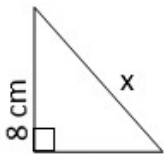
୧. ଦାଣ୍ଡୀ ଯାତ୍ରାର ଲେଖକା ପରିଚୟ ପ୍ରଦାନ କର ।

୨. ସୂଚନାରେ ଥିବା ଶବ୍ଦାର୍ଥକୁ ଲେଖ ।

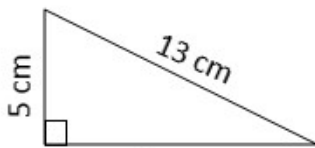
୩. ତୁମେ ପ୍ରାଇମେରୀ ସ୍କୁଲରେ ପଢୁଥିବା ବୟସରେ କୌଣସି ଏକ ସ୍ମରଣୀୟ ଘଟଣା ବିଷୟରେ ଗୋଟିଏ ଅନୁକ୍ଳେଦରେ ଲେଖ(ପ୍ରାୟ ୫ଟି ବାକ୍ୟରେ)।

Subject- Maths

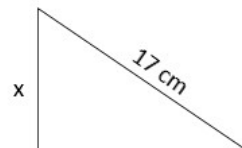
- 1. Practice multiplication table 11 to 16 two times..
- 2. Form equation from the given statements
 - a) 3 added to 3 times of itself.
 - b) Half of a number given 20.
 - c) Sum of three consecutive even number is 100.
- 3. Find sides of given right angled Δ.



a) 6 cm



b) x



c) 15 cm

- 4. Write missing number.
 - a) A1, B2, C3, D4, _____, _____, _____
 - b) AZ, BY, CZ, _____, _____, _____

5. Solve given riddle.

I am a two digit number My tens digits is twice my ones digits. The sum of my digits is 12. What number am I.

Subject- SST

Write about the following key words:

i) Medieval period

ii) Amuktamalyada

iii) Persian wheel

iv) Subcontinent

v) Manuscript

vi) Mansabdari System

Day – 6

Subject- English

1. **Writing** : Write a letter to your friend to inviting her/him to attend your birthday party.

2. **Translation** : Translate into English.

i) ମୁଁ ସ୍କୁଲକୁ ଯାଇଥିଲି ।

ii) ସେ ଖାଦ୍ୟ ଖାଇଥିଲା ।

iii) ଆମେ କାମ ସମାପ୍ତ କରିଥିଲୁ ।

iv) ସେମାନେ ଘର ତିଆରି କରିଥିଲେ ।

v) ମୁଁ ପୁସ୍ତକ ପଢ଼ିଥିଲି ।

Subject- Odia

ଦାଣ୍ଡୀ ଯାତ୍ରା

ଅନୁଛେଦ- “ଅହମଦାବାଦ ନିକଟସ୍ଥ ଆହୁତି ଦେବାକୁ ହେବ ।

(ଲେଖକା ପରିଚୟ ସହ ଏ ଅନୁଛେଦକୁ ଉଚ୍ଚମ୍ବରରେ ପଢ଼ ଓ ବୁଝ । ତା' ପରେ ନିମ୍ନରେ ଦିଆଯାଇଥିବା ପ୍ରଶ୍ନ ଗୁଡ଼ିକର ଉତ୍ତର ଲେଖ ।)

୧. କ) ଅନୁଛେଦରେ ବ୍ୟବହାର ହୋଇଥିବା ଶ, ସ, ଷ ଯୁକ୍ତ ଶବ୍ଦ ଗୁଡ଼ିକୁ ଲେଖ ।

ଖ) ସ୍ତ, ସ୍ତ, ପ୍ତ, ପ୍ତ ବ୍ୟବହାର କରି ଶବ୍ଦ ଗଠନ କର ।

ଗ) ସାବରମତୀ ଆଶ୍ରମ କେଉଁଠି ଅଛି ?

ଘ) ଦାଣ୍ଡୀ ଯାତ୍ରାରେ ଗାନ୍ଧିଜୀଙ୍କ ସହ କେତେଜଣ ଆଶ୍ରମବାସୀ ସାମିଲ ହୋଇଥିଲେ ?

Subject- Maths

1. Practice square table 31^2 to 40^2 two times.

2. Find value of

a) $(3428 \times 749)^0 = \underline{\hspace{2cm}}$.

b) $(-1)^{24} = \underline{\hspace{2cm}}$.

c) $(10 + 2^0 + 3^0 + 4^0) = \underline{\hspace{2cm}}$.

3. Write the given equation in statement.

a) $3x + 5 = 20$

b) $\frac{x}{5} = 100$

c) $\frac{3x+5}{10} = -100$

4. Write the name of 10 material from your environment which is related to angles, write the name of material and type angles.

5. Solve given number puzzle.

6	X	3	=																
-		+		-															
1		12	=	10	+														
=		=		=		X												X	
			+	8	=														3
						=													=
7	+	12	=			46	-	25	=										
X		+						+											
			-	17	=	13													27
=		=		-		+		=		+									+
56	-	42	=					+	35	=									
				=		=													=
		8		3	X	16	=												65
		X						-											
17				4	X		=	32											45
+		=		X				=											-
21	-	16	=			7	+		=										
=				=															=
					X	3	=	60											22

Subject- SST

Paste some pictures of the different forts built by the Rajputs.

Subject - G.K

1. Write the name of 20 invention and inventor names.
2. Write the 5 famous festivals of India.
3. Write Current affairs of this week.

Subject – Computer

Project 4

Draw cyber safety poster on a A4 size paper.

Example: Use Strong Password, Don't Share OTP.

Summer Special Activity

Dear students, visit your nearby daily market with your parents and buy some groceries or other household items. Prepare a bill based on the items you have purchased.